
Complex Analysis

Math 214 Spring 2004
©2004 Ron Buckmire

Fowler 112 MWF 3:30pm - 4:25pm
<http://faculty.oxy.edu/ron/math/312/04/>

Class 6: Monday February 2

SUMMARY Functions of a Complex Variable

CURRENT READING Saff & Snider, §2.1

HOMEWORK Saff & Snider, Section 2.1 # 3, 4, 5, 6, 10, 11, 15 **Extra Credit: #21**

Functions of a Complex Variable

Given a set S of complex numbers, a function f is a rule which assigns to each $z \in S$ a complex number w . The set S is known as the **domain of definition** of f . (NOTE: The “domain of definition” is not necessarily a **domain** in the formal mathematical sense of the word.) The set of all $w \in \mathcal{Z}$ given by $w = f(S)$ is called the **image of S under f** or the **range of f** .

The value $w = f(z)$ can be written as $u + iv$, in other words:

$$w = f(z) = f(x + iy) = u(x, y) + iv(x, y)$$

where $u(x, y)$ and $v(x, y)$ are real functions of two real variables.

EXAMPLE 1

Write $f(z) = z^2 - z + 2i$ in the form $w = u(x, y) + iv(x, y)$

In addition, given a function $w(x, y)$ you can write it in terms of z , \bar{z} and constants.

Exercise 1

Write $w(x, y) = x^2 + iy^2$ in terms of z and \bar{z}

Mapping

As usual, operations using complex variables have geometric significance.

First, let's get more practice evaluating functions of a complex variable:

Using $f(z) = z^3$, compute

(a) $f(2) =$

(b) $f(\sqrt{2} + i\sqrt{2}) =$

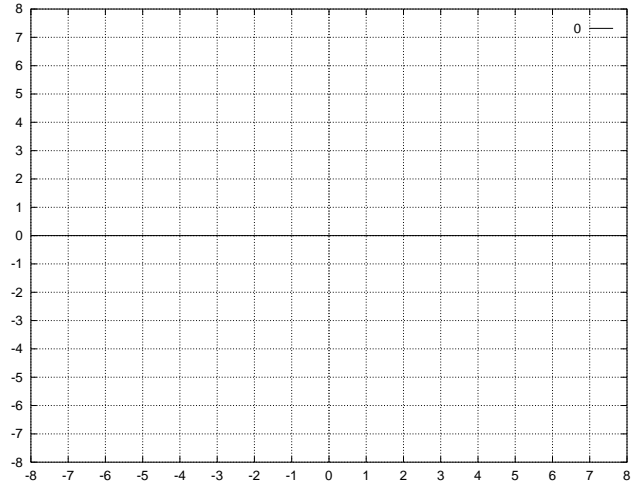
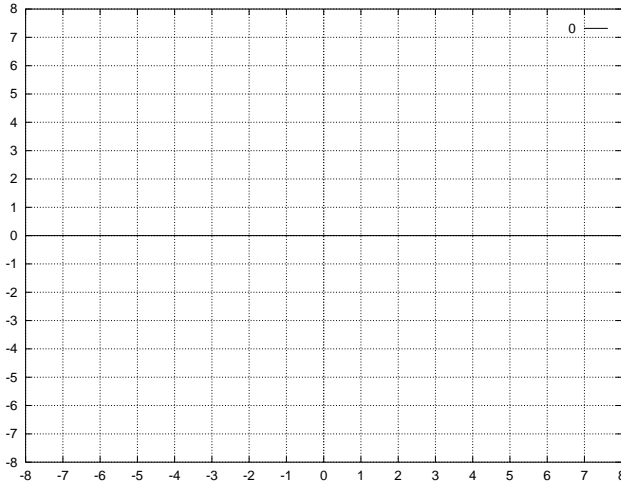
(c) $f(2i) =$

GroupWork

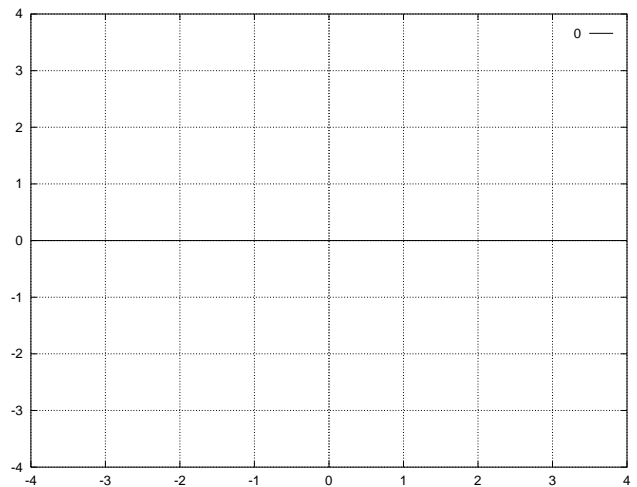
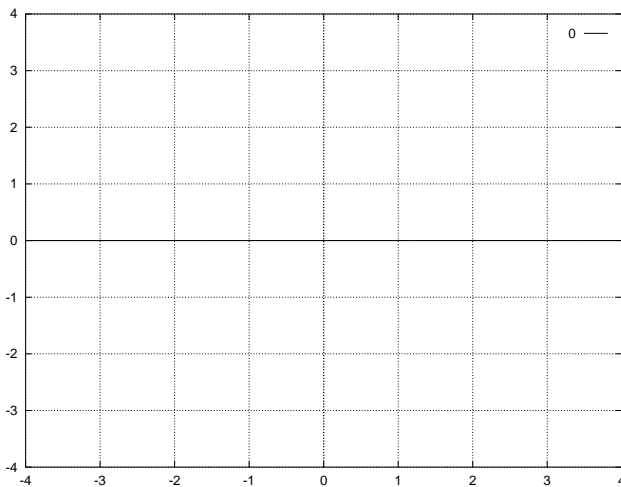
If you consider $w = f(z)$ a mapping from the z -plane to the w -plane, draw a sketch of what the “quarter-disc” of radius 2 in the first quadrant of the z -plane maps to in the w -plane under the mapping $f(z) = z^3$.

In the language of mathematics, we say that what you draw in the w -plane is **the image** of the quarter-disk in the z -plane *under* the mapping $f(z)$

1. Write down a definition of the “quarter disk of radius 2” using complex inequalities
2. Shade in this region on your (x, y) axes (z -plane) below
3. Shade in the mapped region on your (u, v) axes (w -plane) below



On the other set of axes, sketch what the image of the mapping of the unit “quarter-disk” under $f(z) = 2z^4 - 2 - i$ looks like in the w -plane.

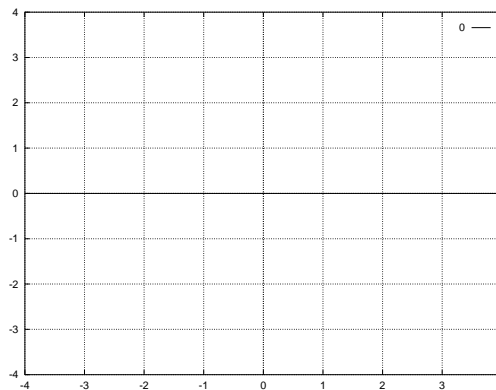
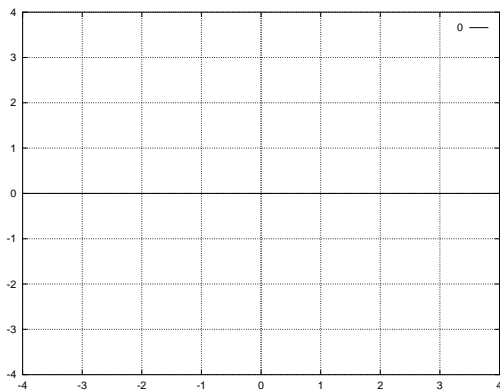


We generally can decompose mappings into 3 dominant characteristics or components. That is, mappings can be described as some combination of **rotation**, **translation** and **reflection**.

Rotation

Consider $f(z) = (1 + i)z$. How does this function represent a rotation mapping?

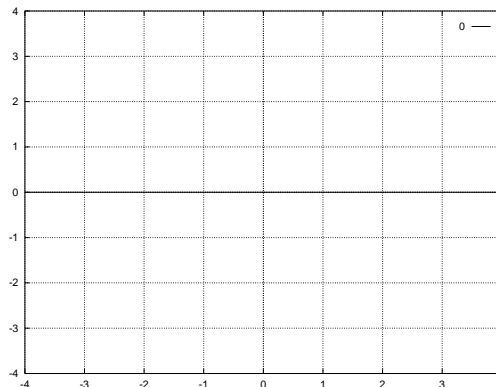
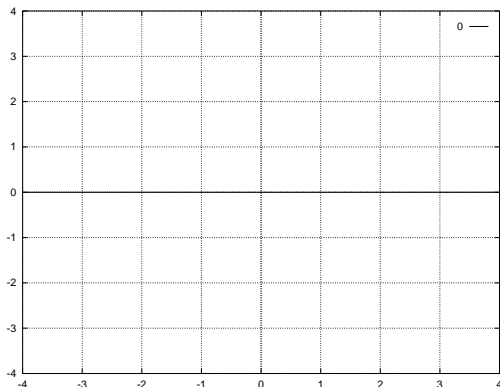
(You may want to consider its effect on the set of points $\text{Im } z = 0$.)



Reflection

Consider $f(z) = \bar{z}$. How does this function represent a reflection mapping?

(You may want consider the effect of f on the set of points $\text{Im } z = 2$.)



Translation

Consider $f(z) = 2z - i$. How does this function represent a translation mapping?

(You may want consider the effect of f on the set of points $|z| = 1$.)

