

Test 2: Multivariable Calculus

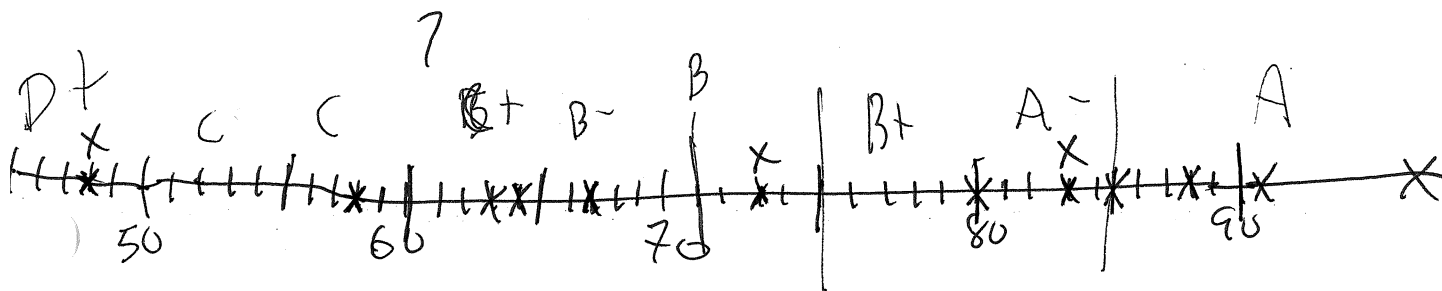
Math 224
Ron Buckmire

Friday April 16 2004
2:30pm-3:30pm

Name: Key

MB → 78

Directions: Read *all* problems first before answering any of them. Questions 1 and 2 are related. This is a one hour, open-notes, open book, test. **No calculators.** You must show all relevant work to support your answers. Use complete English sentences and **CLEARLY** indicate your final answers to be graded from your “scratch work.”



No.	Score	Maximum
1		20
2		20
3		20
4		20
5		20
Extra Credit		10
Total		100

1. (20 points.) Chain Rule, Implicit Function Theorem.

Consider a surface implicitly-defined as $F(x, y, z) = 0$ which can be written as $z = f(x, y)$ so that $F(x, y, f(x, y)) = 0$.

a. (10 points) Use the Chain Rule to show that $\frac{\partial F}{\partial x} + \frac{\partial F}{\partial z} \frac{\partial z}{\partial x} = 0$ and $\frac{\partial F}{\partial y} + \frac{\partial F}{\partial z} \frac{\partial z}{\partial y} = 0$

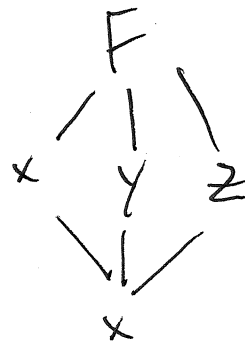
$$\frac{\partial F}{\partial x} \frac{\partial x}{\partial x} + \frac{\partial F}{\partial y} \frac{\partial y}{\partial x} + \frac{\partial F}{\partial z} \frac{\partial z}{\partial x} = 0$$

$$\frac{\partial x}{\partial x} = 1 \quad \frac{\partial y}{\partial x} = 0$$

$$F_x + F_z \frac{\partial z}{\partial x} = 0$$

$$\frac{\partial F}{\partial x} \frac{\partial x}{\partial y} + \frac{\partial F}{\partial y} \frac{\partial y}{\partial y} + \frac{\partial F}{\partial z} \frac{\partial z}{\partial y} = 0$$

$$F_y + F_z \frac{\partial z}{\partial y} = 0$$



b. (10 points) Use the implicit function theorem to obtain the equivalent result,

that is, $\frac{\partial z}{\partial x} = -\frac{\frac{\partial F}{\partial x}}{\frac{\partial F}{\partial z}}$ and $\frac{\partial z}{\partial y} = -\frac{\frac{\partial F}{\partial y}}{\frac{\partial F}{\partial z}}$

$$\vec{F}(\vec{x}, \vec{y}) = 0 \quad \vec{y} = \vec{G}(\vec{x})$$

$$\vec{G}'(\vec{x}) = -(\vec{F}_{\vec{y}})^{-1} \vec{F}_{\vec{x}}$$

In this case $F(x, y, z) = \vec{F}(\vec{x}, \vec{y})$ so $\vec{x} = (x, y)$
 $\vec{F} = F$ $\vec{G} = f$ $\vec{G}: \mathbb{R}^2 \rightarrow \mathbb{R}^1$ $\vec{F}_{\vec{y}} = z$
 $\vec{F}: \mathbb{R}^3 \rightarrow \mathbb{R}^1$

$$\vec{G}'(\vec{x}) = \begin{pmatrix} \frac{\partial G}{\partial x} & \frac{\partial G}{\partial y} \end{pmatrix}_{1 \times 2} = - \begin{pmatrix} \frac{\partial F}{\partial z} \end{pmatrix}^{-1} \begin{pmatrix} \frac{\partial F}{\partial x} & \frac{\partial F}{\partial y} \end{pmatrix} = \begin{pmatrix} -\frac{\partial F}{\partial x} & -\frac{\partial F}{\partial y} \\ \frac{\partial F}{\partial z} & \frac{\partial F}{\partial z} \end{pmatrix}$$

$$\vec{F}_{\vec{y}} = \frac{\partial F}{\partial z}$$

$$\vec{G}'(\vec{x}) = \begin{pmatrix} \frac{\partial z}{\partial x} & \frac{\partial z}{\partial y} \end{pmatrix} =$$

$$\vec{F}_{\vec{x}} = \begin{pmatrix} \frac{\partial F}{\partial x} & \frac{\partial F}{\partial y} \end{pmatrix}$$

2. (20 points.) Partial Differentiation, Gradient Operator.

Consider $\cos(x+y+z) = xyz$ as an example of $F(x,y,z) = 0$ and $z = f(x,y)$ from Question 1.

a. (10 points) Write down F and f , if you can. (If you can't, explain why the requested expression can not be obtained.) How are these two functions different?

$$F(x,y,z) = \cos(x+y+z) - xyz = 0$$

$z = f(x,y)$ is IMPLICITLY DEFINED and can not be written down as an explicit expression

F is explicit,

b. (10 points) Write down $\vec{\nabla} F$ and $\vec{\nabla} f$, if you can. (If you can't, explain why the requested expression can not be obtained.) How are these two vectors different?

$$\begin{aligned}\vec{\nabla} F &= (F_x, F_y, F_z) \text{ in } \mathbb{R}^3 \\ &= (-\sin(x+y+z) - yz, -\sin(x+y+z) - xz, -\sin(x+y+z) - xy)\end{aligned}$$

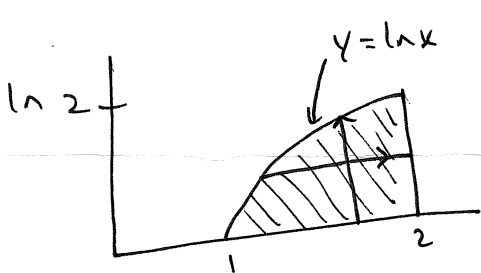
$$\begin{aligned}\vec{\nabla} f &= (f_x, f_y) = \left(-\frac{F_x}{F_z}, -\frac{F_y}{F_z} \right) \text{ in } \mathbb{R}^2 \\ &= \left(\frac{+\sin(x+y+z) + yz}{-\sin(x+y+z) - xy}, \frac{-\sin(x+y+z) - xz}{+\sin(x+y+z) - xy} \right)\end{aligned}$$

3. (20 points.) Iterated Integration.

a. (10 points) Evaluate $\int_{-3}^0 \int_0^2 \int_{-1}^1 \cos(x+y+z) - xyz \, dx \, dz \, dy$

$$\begin{aligned} & \int_{-3}^0 \int_0^2 \left. \sin(x+y+z) - \frac{x^2 y z}{2} \right|_{-1}^1 dz dy = \int_{-3}^0 \int_0^2 \sin(1+y+z) - \sin(-1+y+z) \\ & \quad - \left(\frac{1}{2} y z - \frac{1}{2} y z \right) dz dy \\ & = \int_{-3}^0 \left. -\cos(1+y+z) + \cos(-1+y+z) \right|_0^2 dy \\ & = \int_{-3}^0 -\cos(3+y) + \cos(1+y) + \cos(1+y) - \cos(-1+y) dy \\ & = \left. -\sin(3+y) + 2\sin(1+y) + \sin(-1+y) \right|_{-3}^0 \\ & = -\sin 3 + 2\sin 1 - \sin(-1) - \left[-\sin 0 + 2\sin(-2) - \sin(-4) \right] \\ & = -\sin 3 + 2\sin 1 + \sin 1 - 2\sin(-2) + \sin(-4) \\ & = \boxed{3\sin 1 + 2\sin 2 - \sin 3 - \sin 4} \end{aligned}$$

b. (10 points) Evaluate $\int_1^2 \int_0^{\ln x} \frac{1}{x} dy dx = \int_0^{\ln 2} \int_{e^y}^2 \frac{1}{x} dx dy$

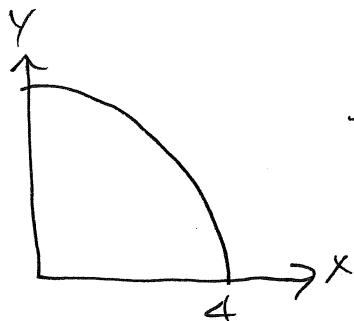


$$\begin{aligned} & = \int_0^{\ln 2} \ln x \Big|_{e^y}^2 dy = \int_0^{\ln 2} \ln 2 - \ln(e^y) dy \\ & = \int_0^{\ln 2} \ln 2 - y dy = (\ln 2)^2 - \frac{(\ln 2)^2}{2} \\ & = \boxed{\frac{(\ln 2)^2}{2}} \end{aligned}$$

$$\begin{aligned} \int_1^2 \int_0^{\ln x} \frac{1}{x} dy dx & = \int_1^2 \frac{\ln x}{x} dx \\ & = \left. \frac{(\ln x)^2}{2} \right|_1^2 \\ & = \frac{(\ln 2)^2}{2} - \frac{(\ln 1)^2}{2} = \frac{(\ln 2)^2}{2} \end{aligned}$$

4. (20 points.) Multiple Integration.

a. (10 points) Evaluate $\iint_R ye^x dA$ where R is the first quadrant of the circle of radius 4 centered at the origin. (Sketch the region R).



$$\int_0^{\pi/2} \int_0^4 r \sin \theta e^{r \cos \theta} r dr d\theta = \int_0^{\pi/2} \int_0^4 r^2 \sin \theta e^{r \cos \theta} dr d\theta$$

$$= \int_0^{\pi/2} \left[-\frac{1}{\cos \theta} r e^{r \cos \theta} + r e^{r \cos \theta} \right]_0^4 d\theta = \int_0^{\pi/2} (-4e^{4 \cos \theta} + 4e^{r \cos \theta}) d\theta$$

$$= -\frac{r^2}{2} \Big|_0^4 + r e^r - e^r \Big|_0^4$$

$$= -8 + 4e^4 - e^4 - (0 - e^0)$$

$$= \boxed{-7 + 3e^4}$$

b. (10 points) Consider $\int_0^1 \int_{\sqrt{x}}^1 \int_0^{1-y} dz dy dx = \frac{1}{12}$. Re-compute this integral using a different triple integral which represents the same volume.



$$\int_0^1 \int_0^{y^2} \int_0^{1-y} dz dx dy = \int_0^1 \int_0^{y^2} (1-y) dx dy$$

$$= \int_0^1 y^2 (1-y) dy = \int_0^1 (-y^3 + y^2) dy = \left[-\frac{y^4}{4} + \frac{y^3}{3} \right]_0^1$$

$$= \frac{1}{3} - \frac{1}{4} = \boxed{\frac{1}{12}}$$

5. (20 points.) Constrained Multivariable Optimization, Lagrange Multipliers

The "geometric mean" of n numbers is defined as $f(x_1, x_2, \dots, x_n) = \sqrt[n]{x_1 x_2 x_3 \dots x_n}$. Suppose that x_1, x_2, \dots, x_n are positive numbers such that $\sum_{i=1}^n x_i = x_1 + x_2 + x_3 + \dots + x_n = c$, where c is a constant.

a. (10 points) Find the maximum value of the geometric mean of n positive numbers given the constraint that their sum must be equal to a constant. [HINT: Consider f^n instead of f !]

$$\phi = f^n = x_1 x_2 x_3 x_4 \dots x_n$$

$$g = x_1 + x_2 + x_3 + \dots + x_n$$

$$\nabla \phi = \nabla (f^n) = \lambda \nabla g$$

$$\nabla (f^n) = (x_2 x_3 x_4 \dots x_n, x_1 x_3 x_4 \dots x_n, x_1 x_2 x_4 \dots x_n, \dots, x_1 x_2 \dots x_{n-1})$$

$$\nabla g = (1, 1, 1, 1, \dots, 1)$$

$$x_2 x_3 \dots x_n = \lambda$$

$$x_1 x_3 \dots x_n = \lambda$$

$$x_1 x_2 x_4 \dots x_n = \lambda$$

\vdots

$$x_1 x_2 \dots x_{n-1} = \lambda$$

$$x_1 + x_2 + \dots + x_n = c$$

$$\prod_{i=1}^n x_i = \lambda x_1$$

$$\prod_{i=1}^n x_i = \lambda x_2$$

$$\prod_{i=1}^n x_i = \lambda x_3$$

$$\prod_{i=1}^n x_i = \lambda x_n$$

$$\lambda(x_1 + x_2 + \dots + x_n)$$

$$\lambda x_1 = \lambda x_2 = \lambda x_3 = \dots = \lambda x_n$$

either $\lambda = 0$

or

$$x_1 = x_2 = x_3 = \dots = x_n$$

If $\lambda = 0$ one $x_i = 0$
(impossible)

$$n x = c \Rightarrow x = \frac{c}{n}$$

$$\phi = \sqrt[n]{\left(\frac{c}{n}\right)^n} = \frac{c}{n} \leftarrow \text{MAX}$$

b. (10 points) You can deduce from part (a) that the geometric mean of n numbers is always less than or equal to the arithmetic mean, that is:

$$\sqrt[n]{x_1 x_2 x_3 \dots x_n} \leq \frac{x_1 + x_2 + x_3 + \dots + x_n}{n}$$

Under what conditions will the geometric mean be exactly equal to the arithmetic mean of those same n numbers?

When $x_1 = x_2 = x_3 = \dots = x_n = X$

geometric mean = $\sqrt[n]{X^n} = X$

arithmetic mean = $\frac{nX}{n} = X$

When $\sum_{i=1}^n x_i = c$ the max value of $\sqrt[n]{\prod_{i=1}^n x_i} = \frac{c}{n}$

so $\sqrt[n]{\prod_{i=1}^n x_i} \leq \frac{\sum_{i=1}^n x_i}{n}$

EXTRA CREDIT (10 points.) Unconstrained Multivariable OptimizationConsider $f(x, y) = x^4 + y^4 - 4xy + 1$.a. (5 points) Find the three critical points of $f(x, y)$.Critical points occur at $\vec{\nabla} f = \vec{0}$

$$f_x = 4x^3 - 4y = 0$$

$$y = x^3$$

$$f_y = 4y^3 - 4x = 0$$

$$x = y^3$$

$$y = y^9$$

$$y^9 - y = 0$$

$$(y^8 - 1)y = 0$$

$$(y^4 - 1)(y^4 + 1)y = 0$$

$$(y^2 - 1)(y^2 + 1)(y^4 + 1)y = 0$$

$$y = 0, y = 1, y = -1$$

$$x = y^3 = 0, x = 1, x = -1$$

$$(0, 0, 1)$$

$$(1, 1, -1)$$

$$(-1, -1, -1)$$

b. (5 points) Use the Second Derivative Test to classify each of the three critical points of $f(x, y)$.

$$f_{xx} = 12x^2$$

$$f_{yy} = 12y^2$$

$$f_{xy} = -4$$

$$\text{At } (0, 0, 1) \quad D = 0 \cdot 0 - (-4)^2 = -16 < 0 \Rightarrow \text{SADDLE}$$

$$\text{At } (1, 1, -1) \quad D = 12 \cdot 12 - (-4)^2 = 144 - 16 = 128 > 0 \quad \begin{array}{l} \text{LOCAL} \\ \text{MIN} \end{array}$$

$$f_{xx} > 0 \quad f_{yy} > 0$$

$$\text{At } (-1, -1, -1) \quad D = 12 \cdot 12 - (-4)^2$$
$$= 144 - 16 > 0 \quad \begin{array}{l} \text{LOCAL} \\ \text{MIN} \end{array}$$

$$12 = f_{xx} > 0 \quad \& \quad f_{yy} > 0$$