

HOMEWORK 5 SOLUTIONS:

①

Set 1: SM 2.2: 5-7, 24, 25

Set 2: SM 2.2: 18, 56, 57; 2.5: 6, 10

Set 3: Worksheet (attached)

BONUS: SM 2.5: 53

Set 1: SM 2.2: 5-7, 24, 25

5. $f(x) = 3x + 1$, $a = 1$

Two ways:

$$\begin{aligned} \text{(a) } f'(a) &= \lim_{h \rightarrow 0} \frac{f(a+h) - f(a)}{h} = \lim_{h \rightarrow 0} \frac{3(a+h) + 1 - (3a + 1)}{h} \\ &= \lim_{h \rightarrow 0} \frac{3a + 3h + 1 - 3a - 1}{h} = \lim_{h \rightarrow 0} \frac{3h}{h} = \lim_{h \rightarrow 0} 3 = 3 \end{aligned}$$

$$\boxed{f'(a) = 3 \Rightarrow f'(1) = 3}$$

OR

$$\begin{aligned} \text{(b) } f'(1) &= \lim_{h \rightarrow 0} \frac{f(1+h) - f(1)}{h} = \lim_{h \rightarrow 0} \frac{3(1+h) + 1 - (3 \cdot 1 + 1)}{h} \\ &= \lim_{h \rightarrow 0} \frac{3 + 3h + 1 - 3 - 1}{h} = \lim_{h \rightarrow 0} \frac{3h}{h} = \lim_{h \rightarrow 0} 3 = 3 \end{aligned}$$

$$\boxed{f'(1) = 3}$$

6. $f(x) = 3x^2 + 1$, $a = 1$

Two ways:

$$\begin{aligned} \text{(a) } f'(a) &= \lim_{h \rightarrow 0} \frac{f(a+h) - f(a)}{h} = \lim_{h \rightarrow 0} \frac{3(a+h)^2 + 1 - (3a^2 + 1)}{h} \\ &= \lim_{h \rightarrow 0} \frac{3(a^2 + 2ah + h^2) + 1 - 3a^2 - 1}{h} \\ &= \lim_{h \rightarrow 0} \frac{3a^2 + 6ah + 3h^2 + 1 - 3a^2 - 1}{h} \end{aligned}$$

cont'd next page

b cont'd

$$= \lim_{h \rightarrow 0} \frac{6ah + 3h^2}{h} = \lim_{h \rightarrow 0} \frac{\cancel{h}(6a + 3h)}{\cancel{h}}$$

$$= \lim_{h \rightarrow 0} 6a + 3h = 6a$$

$$f'(a) = 6a \Rightarrow f'(1) = 6$$

OR

$$f'(1) = \lim_{h \rightarrow 0} \frac{f(1+h) - f(1)}{h} = \lim_{h \rightarrow 0} \frac{3(1+h)^2 + 1 - (3(1)^2 + 1)}{h}$$

$$= \lim_{h \rightarrow 0} \frac{3(1 + 2h + h^2) + 1 - 3 - 1}{h}$$

$$= \lim_{h \rightarrow 0} \frac{3 + 6h + 3h^2 - 3}{h} = \lim_{h \rightarrow 0} \frac{6h + 3h^2}{h}$$

$$= \lim_{h \rightarrow 0} 6 + 3h = 6 \quad \boxed{f'(1) = 6}$$

7. $f(x) = \sqrt{3x+1}$; $a=1$

Two ways

$$(a) f'(a) = \lim_{h \rightarrow 0} \frac{f(a+h) - f(a)}{h} = \lim_{h \rightarrow 0} \frac{\sqrt{3(a+h)+1} - \sqrt{3a+1}}{h}$$

$$= \lim_{h \rightarrow 0} \frac{\sqrt{3a+3h+1} - \sqrt{3a+1}}{h} \cdot \frac{\sqrt{3a+3h+1} + \sqrt{3a+1}}{\sqrt{3a+3h+1} + \sqrt{3a+1}}$$

$$= \lim_{h \rightarrow 0} \frac{(3a+3h+1) - (3a+1)}{h[\sqrt{3a+3h+1} + \sqrt{3a+1}]}$$

$$= \lim_{h \rightarrow 0} \frac{3h}{h[\sqrt{3a+3h+1} + \sqrt{3a+1}]} = \frac{3}{\sqrt{3a+0+1} + \sqrt{3a+1}} = \frac{3}{2\sqrt{3a+1}}$$

$$f'(a) = \frac{3}{2\sqrt{3a+1}} \Rightarrow f'(1) = \frac{3}{2\sqrt{3+1}} = \frac{3}{4}$$

57. $\Gamma \rightarrow \text{J}$ in 180°

This should take $\approx 180^\circ \cdot \frac{\mu\text{s}}{11^\circ} \cdot \frac{.001\text{S}}{1\mu\text{S}} \approx \boxed{.016\text{S}}$

$\neg \rightarrow \text{J}$ in 90°

This should take $\approx 90^\circ \cdot \frac{\mu\text{S}}{11^\circ} \cdot \frac{.001\text{S}}{1\mu\text{S}} \approx \boxed{.008\text{S}}$

2.5: 6, 10

6. $f(x) = x^2 + 2\cos x$

$$f'(x) = \lim_{h \rightarrow 0} \frac{f(x+h) - f(x)}{h} = \lim_{h \rightarrow 0} \frac{(x+h)^2 + 2\cos(x+h) - (x^2 + 2\cos x)}{h}$$

$$= \lim_{h \rightarrow 0} \frac{\cancel{x^2} + 2xh + h^2 + 2(\cos x \cos h - \sin x \sin h) - \cancel{x^2} - 2\cos x}{h}$$

$$= \lim_{h \rightarrow 0} \frac{2xh + h^2 + 2\cos x \cos h - 2\cos x - 2\sin x \sin h}{h}$$

$$= \lim_{h \rightarrow 0} \frac{2xh + h^2}{h} + \lim_{h \rightarrow 0} 2\cos x \left(\frac{\cos h - 1}{h} \right) - \lim_{h \rightarrow 0} \frac{2\sin x \sin h}{h}$$

$$= \lim_{h \rightarrow 0} (2x + h) + \lim_{h \rightarrow 0} 2\cos x \cdot \lim_{h \rightarrow 0} \frac{\cos h - 1}{h} - \lim_{h \rightarrow 0} 2\sin x \cdot \lim_{h \rightarrow 0} \frac{\sin h}{h}$$

$$= 2x + 2\cos x \cdot 0 - 2\sin x \cdot 1 = 2x - 2\sin x$$

$$\boxed{f'(x) = 2x - 2\sin x}$$

10. $f(x) = 4x^2 - 3\tan x$

$$f'(x) = \lim_{h \rightarrow 0} \frac{4(x+h)^2 - 3\tan(x+h) - (4x^2 - 3\tan x)}{h}$$

$$= \lim_{h \rightarrow 0} \frac{4(x^2 + 2xh + h^2) - 3\tan(x+h) - 4x^2 + 3\tan x}{h}$$

$$= \lim_{h \rightarrow 0} \frac{\cancel{4x^2} + 2xh + h^2 - \cancel{4x^2}}{h} + \lim_{h \rightarrow 0} \frac{3\tan x - 3\tan(x+h)}{h}$$

$$= \lim_{h \rightarrow 0} \frac{2xh + h^2}{h} + 3 \lim_{h \rightarrow 0} \frac{\tan x - \tan(x+h)}{h}$$

$$\begin{aligned}
&= \lim_{h \rightarrow 0} 2x+h + 3 \lim_{h \rightarrow 0} \frac{\frac{\sin x}{\cos x} - \frac{\sin(x+h)}{\cos(x+h)}}{h} \cdot \frac{\cos x \cos(x+h)}{\cos x \cos(x+h)} \\
&= 2x + 3 \lim_{h \rightarrow 0} \frac{\sin x \cos(x+h) - \cos x \sin(x+h)}{h \cos x \cos(x+h)} \\
&= 2x + 3 \lim_{h \rightarrow 0} \frac{\sin x (\cos x \cosh - \sin x \sinh) - \cos x (\sin x \cosh + \sinh \cos x)}{h \cos x \cos(x+h)} \\
&= 2x + 3 \lim_{h \rightarrow 0} \frac{\cancel{\sin x \cos x \cosh} - \sin^2 x \sinh - \cancel{\sin x \cos x \cosh} - \sinh \cos^2 x}{h \cos x \cos(x+h)} \\
&= 2x + 3 \lim_{h \rightarrow 0} \frac{-\sin^2 x \sinh - \sinh \cos^2 x}{h \cos x \cos(x+h)} \\
&= 2x + 3 \lim_{h \rightarrow 0} \frac{-\sinh h}{h} \left(\frac{\sin^2 x + \cos^2 x}{\cos x \cos(x+h)} \right) \\
&= 2x + 3 \lim_{h \rightarrow 0} \frac{\sinh h}{h} \cdot \lim_{h \rightarrow 0} \frac{1}{\cos x \cos(x+h)} = 2x - 3 \cdot 1 \cdot \sec^2 x
\end{aligned}$$

$$f'(x) = 2x - 3 \sec^2 x$$

BONUS : SM 2.5 : 53

We have

$$f(t) = \begin{cases} 1 & 26 \leq t \leq 30 \\ g(t) & 30 \leq t \leq 34 \\ 0 & 34 \leq t \leq 36 \end{cases}$$

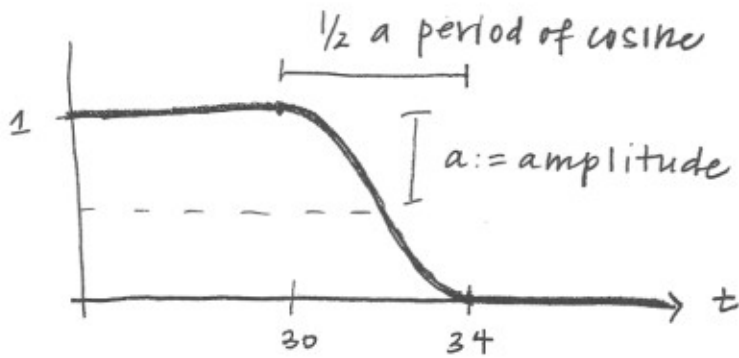
We want $g(t) = a \cos(bt) + c$ so that $f(t)$ is differentiable at $t=30$ and $t=34$.

This means $\lim_{h \rightarrow 0^-} \frac{f(30+h) - f(30)}{h} = g'(30)$

AND $\lim_{h \rightarrow 0^+} \frac{f(34+h) - f(34)}{h} = g'(34)$

AND $g(30) = f(30) = 1$, $g(34) = f(34) = 0$

$f(t)$ looks like:



From the graph (and properties of $\cos x$) we know

$$a = \frac{1}{2} \quad (\text{amplitude})$$

$$c = \frac{1}{2} \quad (\text{vertical shift})$$

We also know that half a period of $\cos x$ should be equal to 4 ($34-30$). If $f(t) = \cos(bt)$, the period is $\frac{2\pi}{b}$.

$$\text{So we want } \frac{2\pi}{b} = 8 \Rightarrow 8b = 2\pi \Rightarrow b = \frac{2\pi}{8} = \frac{\pi}{4}$$

But we also need a horizontal shift

$$\text{This leaves us with: } g(t) = \frac{1}{2} \cos\left(\frac{\pi}{4}(t-30)\right) + \frac{1}{2}$$

Let's check $g'(30)$ and $g'(34)$:

$$g'(t) = \frac{1}{2} (-\sin(\frac{\pi}{4}(t-30))) \cdot \frac{\pi}{4} + 0$$

$$= -\frac{\pi}{8} \sin(\frac{\pi}{4}(t-30))$$

$$g'(30) = -\frac{\pi}{8} \sin(0) = 0 \quad \checkmark \quad 0 = \lim_{h \rightarrow 0^+} \frac{f(30+h) - f(30)}{h}$$

$$g'(34) = -\frac{\pi}{8} \sin(\frac{\pi}{4}(34-30))$$

$$= -\frac{\pi}{8} \sin(\pi) = 0 \quad \checkmark \quad 0 = \lim_{h \rightarrow 0^+} \frac{f(34+h) - f(34)}{h}$$

So $g(t) = \frac{1}{2} \cos\left(\frac{\pi}{4}(t-30)\right) + \frac{1}{2}$ is the function that allows $f(t)$ to be continuous and differentiable at $t=30$ and $t=34$, since $g'(30) = 0 = \lim_{h \rightarrow 0^+} \frac{f(30+h) - f(30)}{h}$ and $g'(34) = 0 = \lim_{h \rightarrow 0^+} \frac{f(34+h) - f(34)}{h}$.

Taylor's Theorem and Error in Tangent Line Approximations

Name: _____

1. In class we saw the following equation for the error in a tangent line approximation.

$$\text{Error, } E(h) = \text{True Value} - \text{Approximate Value} = f(a+h) - (f(a) + f'(a)h).$$

(a) Explain, using complete sentences, why we write $E(h)$. Be sure to state what both E and h are. (This is related to what the function notation means.)

(b) Explain, in complete sentences, how the approximation error changes as we get closer and farther from the value a .

(a) We write $E(h)$ since the error is a function of h , i.e. as h changes, so will the error.

(b) The approximation error decreases as h decreases so that we are closer to a ; similarly as h increases and we are approximating values farther from a , the approximation error increases.

2. For the following functions, find the equation of the tangent line at $x=0$ and find a formula for the error $E(h)$. Then approximate $f(1)$ and evaluate the error in the approximation.

(a) $f(x) = \frac{1}{x+3}$

tangent line at $x=0$:

$$y = \frac{1}{3} + -\frac{1}{9}(x-0) = \frac{1}{3} - \frac{1}{9}x$$

tangent line:
 $y = f(a) + f'(a)h$

$$f(0) = \frac{1}{3}$$

$$f'(x) = \frac{-1}{(x+3)^2}$$

$$f'(0) = \frac{-1}{3^2} = -\frac{1}{9}$$

$$f(1) \approx \frac{1}{3} - \frac{1}{9}(1) = \frac{3}{9} - \frac{1}{9} = \frac{2}{9}$$

$$f(1) - \hat{f}(1) = \frac{1}{1+3} - \frac{2}{9} = \frac{1}{4} - \frac{2}{9} = \frac{1}{36} = \text{error}$$

(b) $f(t) = t^2 + 3t + 5$

tangent line at $x=0$:

$$y = 5 + 3(x-0) = 5 + 3x$$

$$f(1) \approx 5 + 3(1) = 8$$

$$f(1) - \hat{f}(1) = 9 - 8 = 1 = \text{error}$$

$$f(0) = 5$$

$$f'(t) = 2t + 3$$

$$f'(0) = 3$$

$$f(1) = 1 + 3 + 5 = 9$$

(c) $f(x) = xe^x$

$$f(0) = 0 \cdot e^0 = 0$$

$$f(1) = 1 \cdot e^1 = e$$

$$f'(x) = xe^x + e^x$$

$$f'(0) = 0e^0 + e^0 = 1$$

tangent line at $x=0$:

$$y = 0 + 1(x-0) = x$$

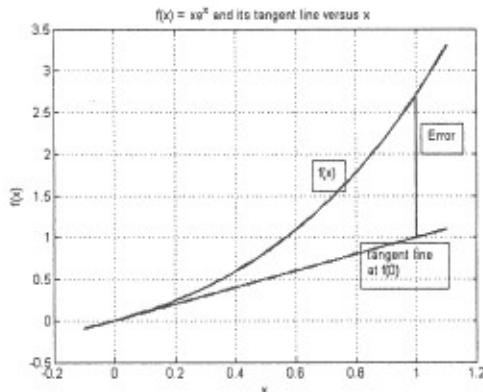
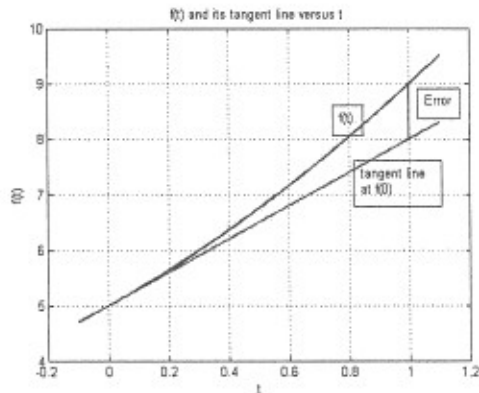
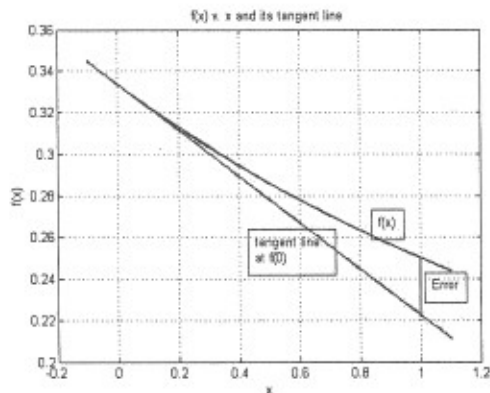
$$f(1) \approx 1$$

$$f(1) - \hat{f}(1) = e - 1 = \text{error}$$

Taylor's Theorem and Error in Tangent Line Approximations

3. Pick one of the functions in (2.), graph the function and the tangent line and illustrate the error in your approximation to $f(1)$.

The following figures show the graphs for each function in part (2.). They are only graphed over the interval $[-0.1, 1.1]$.



4. Pick one of the functions in (2.) along with its error formula $E(h)$ and show that

$$\lim_{h \rightarrow 0} E(h) = 0; \quad \text{and} \quad \lim_{h \rightarrow 0} \frac{E(h)}{h} = 0$$

for (a)

$$E(h) = f(a+h) - (f(a) + f'(a)h) \quad a=0$$

$$= \frac{1}{(0+h)+3} - \left(\frac{1}{3} - \frac{1}{9}h \right)$$

$$= \frac{1}{h+3} - \frac{1}{3} + \frac{1}{9}h \quad E(h) = \frac{1}{h+3} + \frac{h}{9} - \frac{1}{3}$$

$$\lim_{h \rightarrow 0} E(h) = \lim_{h \rightarrow 0} \frac{1}{h+3} + \frac{h}{9} - \frac{1}{3} = \frac{1}{3} + 0 - \frac{1}{3} = 0 \quad \checkmark$$

$$\lim_{h \rightarrow 0} \frac{E(h)}{h} = \lim_{h \rightarrow 0} \frac{\frac{1}{h+3} + \frac{h}{9} - \frac{1}{3}}{h} \cdot \frac{(9(h+3))}{(9(h+3))}$$

$$= \lim_{h \rightarrow 0} \frac{9 + h(h+3) - 3(h+3)}{h \cdot 9 \cdot (h+3)}$$

$$= \lim_{h \rightarrow 0} \frac{\cancel{9} + h^2 + 3h - 3h - \cancel{9}}{9h(h+3)}$$

$$= \lim_{h \rightarrow 0} \frac{h^2}{9h(h+3)} = \lim_{h \rightarrow 0} \frac{h}{9(h+3)} = \frac{0}{27} = 0 \quad \checkmark$$

For (b)

$$E(h) = f(a+h) - (f(a) + f'(a)h) \quad a=0$$

$$= (0+h)^2 + 3(0+h) + 5 - (5 + 3h)$$

$$= h^2 + 3h + 5 - 5 - 3h = h^2 \quad E(h) = h^2$$

$$\lim_{h \rightarrow 0} E(h) = \lim_{h \rightarrow 0} h^2 = 0 \quad \checkmark$$

$$\lim_{h \rightarrow 0} \frac{E(h)}{h} = \lim_{h \rightarrow 0} \frac{h^2}{h} = \lim_{h \rightarrow 0} h = 0 \quad \checkmark$$

for (c):

$$E(h) = f(a+h) - (f(a) + f'(a)h) \quad a=0$$

$$= (0+h)e^{(0+h)} - (0 + 1 \cdot h)$$

$$= he^h - h = h(e^h - 1) \quad E(h) = h(e^h - 1)$$

$$\lim_{h \rightarrow 0} E(h) = \lim_{h \rightarrow 0} h(e^h - 1) = 0(1-1) = 0 \quad \checkmark$$

$$\lim_{h \rightarrow 0} \frac{E(h)}{h} = \lim_{h \rightarrow 0} \frac{h(e^h - 1)}{h} = \lim_{h \rightarrow 0} e^h - 1 = 1 - 1 = 0 \quad \checkmark$$